



À mon tour

3



Compte les abeilles  et complète.

Chaque groupe a le même nombre d'abeilles .

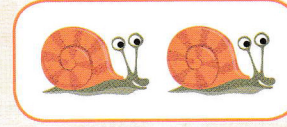







$8 + 8 = \dots$      2 groupes de 8 =  $\dots$

4



Compte les escargots  et complète.








$2 + 2 + 2 + 2 + 2 + 2 = \dots$       $\dots$  groupes de 2 =  $\dots$

5



Compte les crevettes  et complète.



$\dots + \dots + \dots + \dots + \dots = \dots$       $\dots$  groupes de 4 =  $\dots$